

Count Back

$$8 - 2 = \underline{6}$$

Circle the greater number on the number line.
Draw arrows to count back. Write the difference.



$$5 - 3 = \underline{2}$$



$$7 - 1 = \underline{\quad}$$



$$8 - 3 = \underline{\quad}$$



$$6 - 2 = \underline{\quad}$$



$$9 - 3 = \underline{\quad}$$

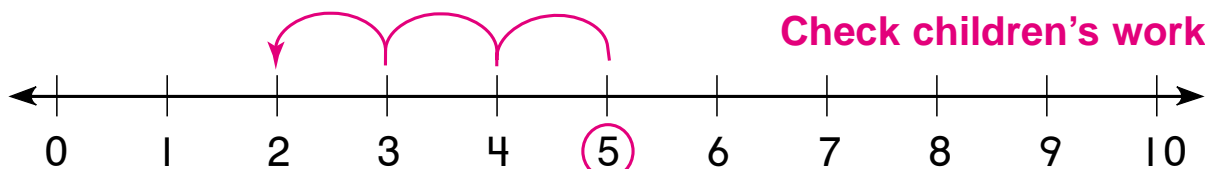
Count Back

$$8 - 2 = \underline{6}$$

Circle the greater number on the number line.

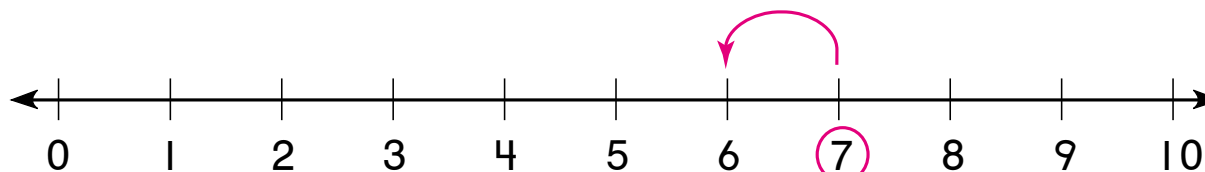
Draw arrows to count back. Write the difference.

1.

**Check children's work.**

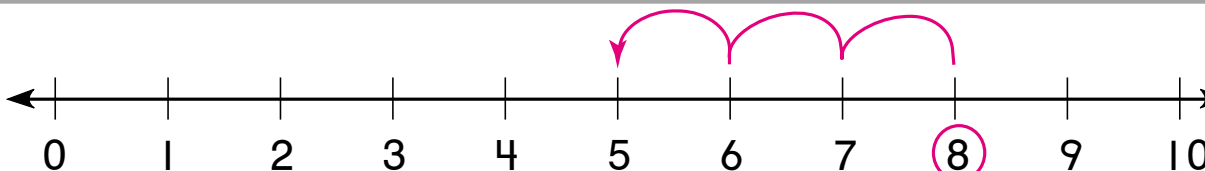
$$5 - 3 = \underline{2}$$

2.



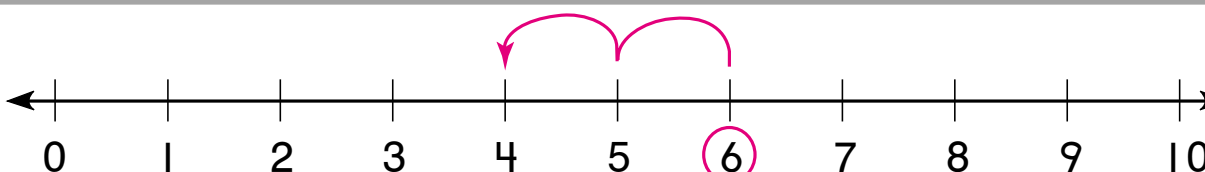
$$7 - 1 = \underline{6}$$

3.



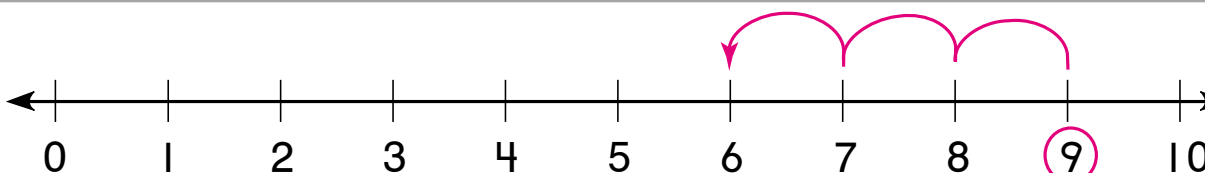
$$8 - 3 = \underline{5}$$

4.



$$6 - 2 = \underline{4}$$

5.



$$9 - 3 = \underline{6}$$